
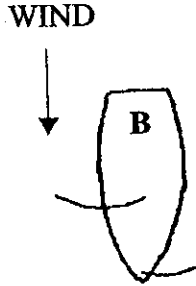
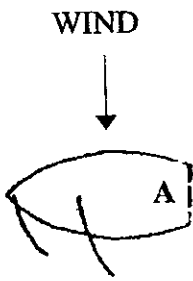


For Questions 2 and 3, use the following three diagrams.



- (3) 2. On what tack are boats A, B, and C?
(3) 3. On which point of sail are boats A, B, and C?

MUTIPLE CHOICE

Multiple Choice Questions: *For questions 4 – 29 there is only one best answer for each question.*

- (2) 4. Club boats may be sailed:
- a. from 9 AM to 5 PM.
 - b. any time.
 - c. any time a chief is present.
 - d. only during daylight hours.
- (1) 5. A boat to be left tied and unattended at the docks should:
- a. be tied to the dock, bow and stern.
 - b. have its sails raised and be tied by the bow only.
 - c. have all lines cleated with its sails raised.
 - d. be tied to the dock with its mainsail dropped (DH) or the boat capsized on the dock (SH).
- (3) 6. Novices and Intermediates may sail in:
- a. Union Bay and Portage Bay only.
 - b. Union Bay only.
 - c. Union Bay and Lake Washington only.
 - d. any fresh water east of the Aurora Bridge.
- (2) 7. The maximum wind speed in which you may sail unsupervised with a novice rating is:
- a. 7 knots
 - b. 15 knots
 - c. 25 knots